



CLASSIII LESSON:5 NOUNS:GENDER

<https://youtu.be/7ehfzQDcBGQ>

(If you are unable to open the given link in mobile device.Kindly copy the link in Google browser,else try to browse in internet explorer,Mozilla Firefox.....

COPY WORK

FEMININE GENDER

A noun that denotes a female is called **feminine gender**.


For example: girl, woman, queen, doe etc.



shutterstock.com • 1010464225



shutterstock.com • 158801603



Q1. Write the feminine gender for these nouns:

1. boy_____
2. son_____
3. uncle_____
4. brother_____
5. king_____
6. grandfather_____
7. man_____



MASCULINE GENDER

A noun that denotes a male is called **masculine gender**.

For example: boy, man, king, deer etc.



Q2. Write the masculine gender for these nouns:

1. queen _____

2. cow _____

3. wife _____

4. mother _____

5. grandmother _____



GRAMMAR BOOK EXERCISE

LESSON:5 NOUNS:GENDER

(Write answers in your grammar book)

EXERCISE:1

- 1.queen
- 2.hen
3. grandmother
- 4.mother
- 5.tigress
- 6.sister
- 7.niece
- 8.wife
- 9.woman
- 10.madam
- 11.lioness
- 12.cow

EXERCISE:2

- 1.lioness
2. queen
- 3.cow
- 4.brother
- 5.grandmother
6. mare
- 7.goddesses
8. women
9. washerwoman
10. mother
11. girls
12. aunt



EXERCISE: 3

1. headmaster Masculine
2. grandmother, lady Feminine
3. heroine Feminine
4. nephew Masculine
5. tigress Feminine
6. gentleman Masculine
7. father Masculine
8. wife Feminine
9. horse Masculine
10. aunt Feminine



COMPUTER CLASS III CHAPTER- 5 More on Paint

Click on this link to understand the chapter more-

<https://youtu.be/zLy3lkQvCak>

Dear Parents, If you are unable to open the given link in mobile device. Kindly copy the link in Google browser, else try to browse in internet explorer, Mozilla Firefox....

MS PAINT



MS Paint is a program used for drawing and painting. It is mainly used to create simple or detailed drawings.

The best thing that makes MS Paint interesting is that we can draw either in Black and White or by using Colours.

How to start MS Paint?

To start the Paint program, follow the steps given below:

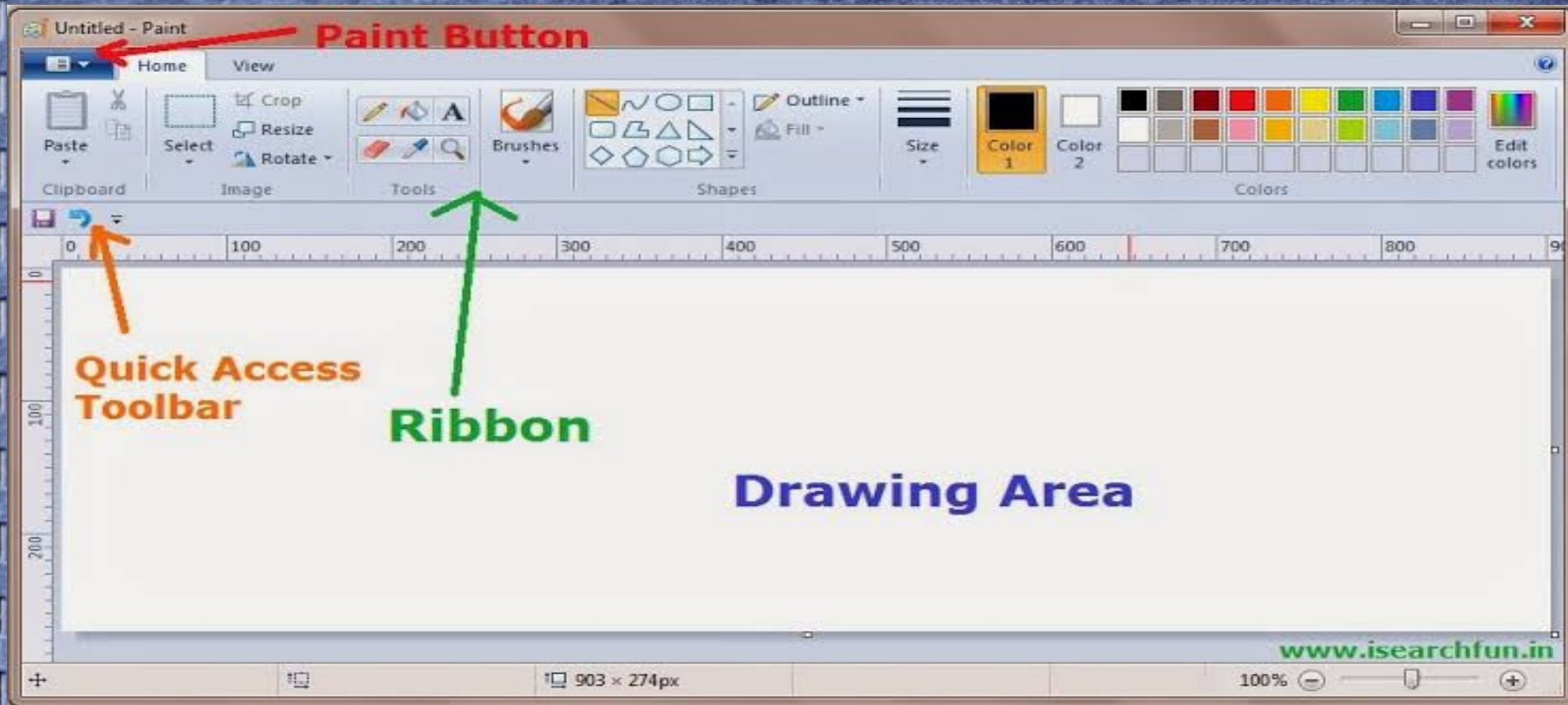
- Click on the start button
- Then select All programs
- Go to Accessories
- Now choose Paint.

Start >Programs>Accessories>Paint



MS Paint Window

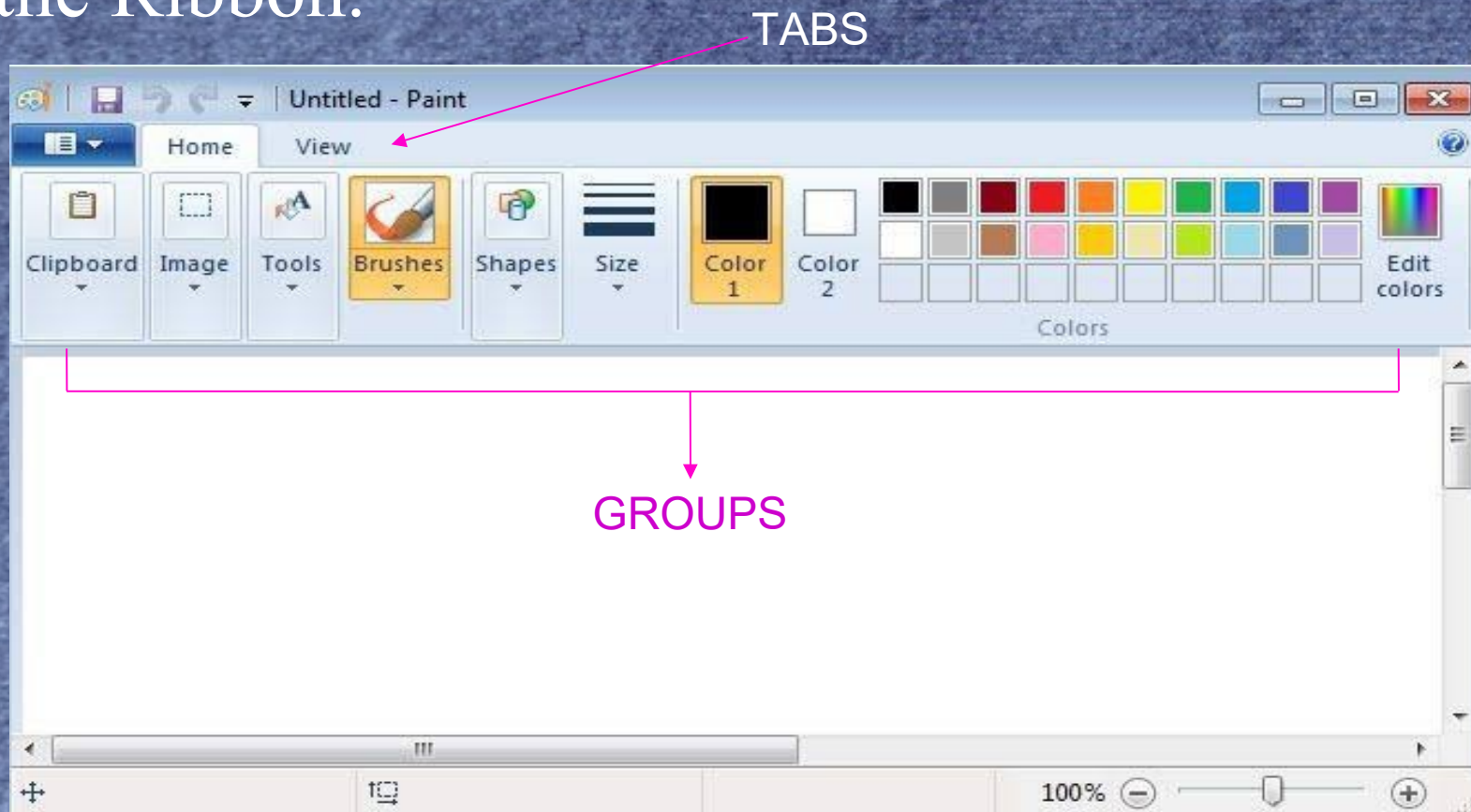
It opens like this. It includes paint button , toolbar, ribbon, drawing area.



The Ribbon

The Ribbon contains two parts : tabs and groups.

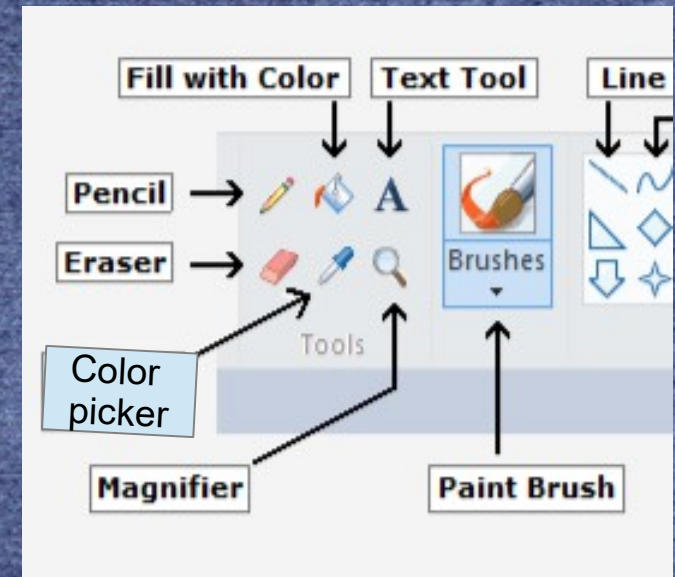
Let's look at Tools and Shapes group in Home tab of the Ribbon.



HOME TAB

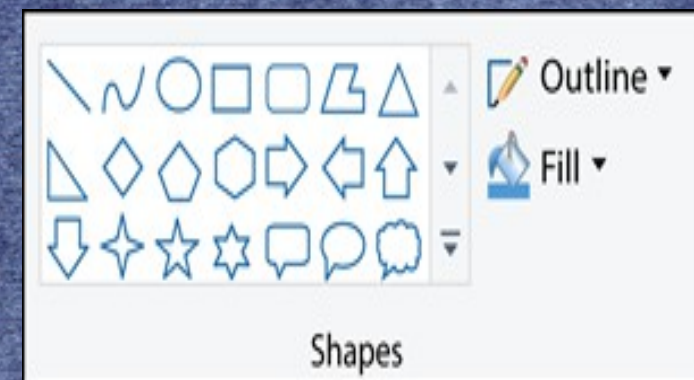
TOOLS GROUP

1. Text – it is used to write text in selected area.
2. Brushes- it is used to select different shapes of brushes for freehand drawing..
3. Magnifier- it is used to enlarge specific area.
4. Color picker- it is used to pick color from any object.
5. Eraser- it is used to erase your drawing.
6. Pencil- it is used for freehand drawing.
7. Fill with color- it is used to fill color to your drawing.



SHAPES GROUP

There are various shapes given in this group which you can use to draw.

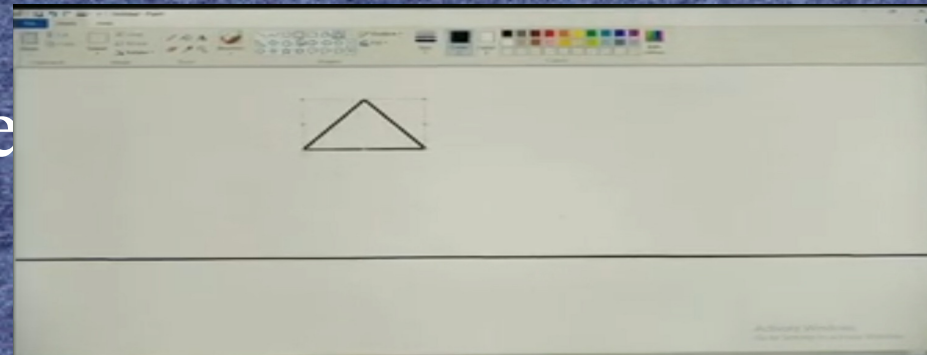


How to draw a picture in Paint?

Let's see how to draw a hut

Step 1: Click on Home tab.

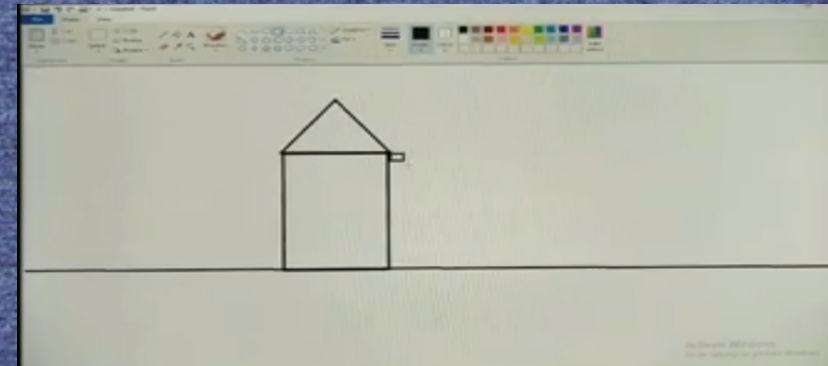
Step 2: Click on triangle shape
from Shapes group.



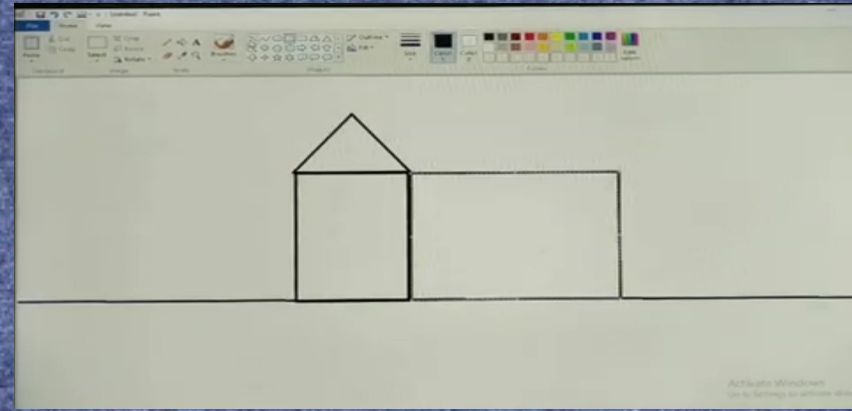
Now click and drag to
draw a triangle as shown.

Step 3: Now, select rectangle

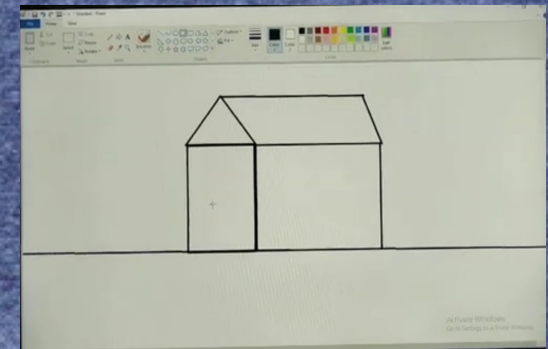
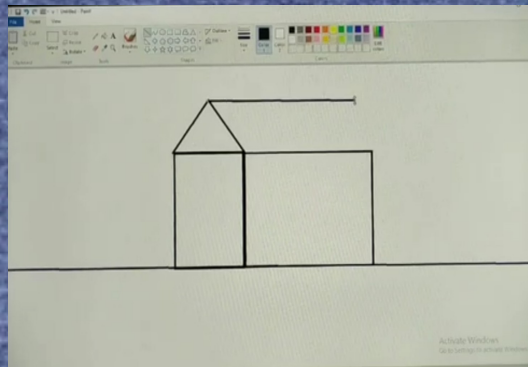
shape and drag to draw as shown.




Step 4 :Now using square make the other part of the hut.




Step 5: Use line tool and make the top roof of the hut and close it.



Step 6: Use rectangle and square to make doors and windows of the hut.




Step 7: Draw clouds, birds and sun using brush tool/pencil from Tool group.



Step 8: You can draw a man using circle shape and line tool.

Step 9: Click on Fill with color from the Tools group.

Step 10: Colour the hut as shown.



Exercise

Note: Question no. 1,2 to be done in notebook.

Q.1 Fill in the blanks:

1. Text command is present in _____ group.
2. MS Paint is a program used for _____ and _____.
3. Click Start button > _____ > _____ > Paint.
4. _____ is used to pick colour from any object.

Q.2 Write the name of command used to draw each object in paint.

Example- Sun: Oval, line

Birds : _____

Ball: _____

Mountains: _____

Kite: _____

Stone: _____

River: _____

See the links

- <https://youtu.be/do4DbXij4c0>
- <https://youtu.be/mmWAMYfs-H0>

Environmental Studies

Class-3

Summary of ch-2,3

Note -

- If you are unable to open the given link in mobile device. Kindly copy the link in Google browser, else try to browse in internet explorer, Mozilla Firefox....

Let us recall ch-2 Our Body

- *Our body has many parts-external and internal .**
- *External parts are arms,legs,head etc.**
- *Internal parts are brain,heart, stomach, lungs,kidneys etc.**
- *All parts have their specific functions.**
- *There are various organ systems in our body like the skeletal system, the digestive system, the respiratory system and the excretory system etc.**
- *There are 206 bones in the human skeleton.**
- *Brain is a main part because it controls all the body parts and organs.**

Now have a look on ch-3 Sense Organs

- *The organs that help us to know about the world around us are called sense organs.**
- *There are five sense organs - eyes, ears, nose, tongue and skin.**
- *Eyes help us to see.**
- *We listen with our ears.**
- *Nose helps us to smell .**
- *We taste with our tongue.**
- *We feel with our skin.**
- *Our brain receives signals from these sense organs and interprets them.**

ENVIRONMENTAL STUDIES

CLASS -3

CH -4

OUR FAMILY

Topics

- *Nuclear family
- *Joint family
- *Single parent family
- *Family resemblance
- *Twins



WHAT IS A FAMILY?

- ⦿ A family is a group of people that are related by blood.
- ⦿ Not all family members live together.
- ⦿ Some families are big, while some families are small.

TYPES OF FAMILIES

Single parent

Family

One parent and child or children



Nuclear

Family

A family group which consist of both parents and their children.



Joint

Family

A family in which relatives in addition to parents and children live together





I ♥ MY FAMILY

SAMPLE OF DIFFERENT FAMILIES



Living together in the family

Living together in the family is a situation where every member of the family i.e the father,wife and children including the extended families at times live together in unity. It is a situation where there is no separation between the families

FAMILY RESEMBLANCE

In a family some of the people look alike, they have some similar features such as the eyes or the nose. This is called family resemblance.



TWINS

Two children born at the same time to a mother are called twins .They may or may not look alike



Adoption

A legal proceeding that creates a parent -child relation between persons not related by blood .

Cousins

The children of uncles and aunts are called cousins .

Functions of a Family

- ❑ Provides Economic Well Being
- ❑ Provides Emotional Support
- ❑ Provides Suitable Life Style
- ❑ Provides Social Relationships
- ❑ Provides Morals and Ethical Values
- ❑ Provides Religious Values
- ❑ Provides Interpersonal Skills



Exercises

Note:

Do all the given exercises in EVS copy.

Solved Exercises

***Fill in the blanks (Do in EVS copy)**

1)A nuclear family is a family. (small)

2)..... have many habits and interests in common. (Twins)

3)The children of uncles and aunts are called..... . (cousins)

4)Living in a family is fun,as long as we have (love & respect)

Question Bank

Q1.what is family?

Ans1 A family is a group of people that are related by blood.

Q2.How many members are there in your family?

Ans2. Do Yourself

Q3. Who cooks food in your family?

Ans3. Do Yourself

Q4. What are the different types of families?

Ans4. There are different types of families - Nuclear family, Joint family and Single parent family.

Q5. How does a child help in a family?

Ans5. Children help with the household work by doing all the small jobs like setting the table, tidying their room, walking the dogs etc.



Q6. What is family resemblance?

Ans6. In a family some of the people look alike this is called family resemblance.

Q7. What are the things that happen in a family?

Ans7. *Everyone watches T.V

***Everyone eats together with others**

***Everybody enjoys with each other**

Do Yourself (Do in EVS copy)

***Write True for the correct answer &
False for the incorrect answer -**

- 1) Members of a family resemble each other.
- 2) A joint family is a small family.
- 3) A nuclear family is smaller than a joint family.
- 4) Children should not waste time by helping in the house.

A. Activity: Draw or stick a photo of your family here.



B. Answer the following questions;

1. Who all live with you at home?

2. Joint family is an extension of nuclear family. Yes/No

3. Do you live in a joint family? Yes/No

4. Do you have relatives who do not live with you? _____

5. Do you resemble anybody in your family? If so, whom? _____

6. i) Whom do you like the most among all your relatives? _____

ii) Whom do you like the most in your family? _____

7. Do you enjoy playing with your cousins? If so, which game do you play? _____

8. How many children do your grandparents have? _____

WORKSHEET
CLASS III
MATHEMATICS

NOTE: Write all the answers of the following questions neatly in a practice copy

Q.1 Write the number names:

a) 87

b) 165

c) 2380

d) 4535

e) 7610

f) 3264

g) 8039

Q.2 Write the numerals of the following:

a) Seven hundred sixty three _____

b) Nine hundred nine _____

c) Six thousand five hundred twelve _____

d) Seven thousand two hundred eighty one _____

e) Two thousand nine hundred eight _____

f) One thousand five hundred thirty one _____

g) Nine thousand _____

Q.3 Form the smallest and greatest number using the following digits:

a) 4,0,2,5

b) 8,3,7,1

c) 3,8,0

d) 5,1,7

e) 6,7,5

Q.4 Write the expanded form of the following :

a) 3948

b) 7495

c) 2934

d) 3307

e) 9999

f) 6781

Q.5 (A) Write the predecessor of :

Predecessor	Number
_____	6345
_____	2532
_____	5470
_____	3172
_____	9817
_____	4000

Q.5 (B) Write the successor of :

Number	Successor
799	_____
8173	_____
2450	_____
3100	_____
6498	_____
4445	_____

Q.6 Rewrite the numbers in ascending order :

a) 7298	7290	7920	7029
_____	_____	_____	_____
b) 9001	9010	2903	2093
_____	_____	_____	_____
c) 172	285	217	437
_____	_____	_____	_____
d) 417	425	403	454
_____	_____	_____	_____
e) 6185	6785	6890	6585
_____	_____	_____	_____

Q.7 Ring the even numbers :

25 74 861 262 3460

Q.8 Write True or false :

a) $3000 + 20 + 6 = 3206$

b) The next number in the sequence of numbers

624, 626, 628 is 630

c) 90 tens and 4 ones = 904

d) The successor of 81 is 80

e) The place value of 3 in 5319 is 300

Q.9 Write the place value of underlined digit first one has been done for you:

a) 1 5 0 7 = 500

b) 3 6 3 9 = _____

c) 6 7 4 5 = _____

d) 4 0 9 2 = _____

e) 4 5 9 8 = _____

Q.10 Fill in the blanks :

- (a) The smallest 3 digit number is _____.
- (b) The greatest 4 digit number is _____.
- (c) The place value of 0 in 109 _____.
- (d) 888 is _____ than 889
- (e) The number that comes just after 1299 is _____.
- (f) _____ and _____ are odd numbers.

Q.11 Match the following :

(A)	(B)
6	VII
9	X
7	VI
10	IX
8	VIII

Q.12 Write the Roman numerals for the following:

3 _____

5 _____

4 _____

2 _____

Q.13 Rewrite in descending order:

a) 2814, 6981, 3259, 4358

b) 6329, 9326, 3962, 2693

c) 4589, 4938, 4621, 4137

d) 3339, 3332, 3331, 3335

Q.14 Complete the following skip counting in 1000s.:

a) 5800 _____ 8800

b). 4299 _____ 6299 _____

c) 3505 _____ 6505


d) 4321 _____ 6321 _____

NOTE - Revise the completed syllabus for the upcoming Evaluation Test.

Note: This worksheet shall be treated for the purpose of revision of the chapter 1. You will also be getting a self assessment test for this chapter in the fourth week of this month.

Parents please make sure that your ward is preparing for the above said test.

FOLLOWING IS THE LINK TO THE YOUTUBE VIDEO EXPLAINING THE CHAPTER CONCERNING WITH THE GIVEN WORKSHEET, MAKE SURE THAT YOU REFER THAT FOR BETTER UNDERSTANDING.



**[https://youtu.
be/2ahMUIi9lwA](https://youtu.be/2ahMUIi9lwA)**

If you are unable to open the given link in mobile device. Kindly copy the link in Google browser, else try to browse in internet explorer, Mozilla Firefox....

1st Week Work

CLASS III (GENERAL KNOWLEDGE)

ANSWERS (1 to 30)

- | | | |
|---------------------|-------------------------------|---|
| 1. Jana- Gana- Mana | 11. Giraffe | 21.ROYGBIV(red, orange, yellow, green, blue, indigo, violet) |
| 2. Vande Mataram | 12. Orange | 22. two hundred six |
| 3. Hockey | 13. Tongue | 23. triangle |
| 4. Indian rupee | 14. Japan | 24. twenty four |
| 5. Sun | 15. World Health Organization | 25. Mahatma Gandhi |
| 6. Thermometer | 16. Eleven | 26. Dr. A.P.J. Abdul Kalam |
| 7. Camel | 17. Honey | 27. Subhash Chandra Bose |
| 8. Nile | 18. Skin | 28. Ram Nath kovind |
| 9. Cheetah | 19. Twenty six | 29. Arvind Kejriwal |
| 10. 206 bones | 20. Twenty four | 30. Amit Shah |

PPT FOR CLASS 3 (With Audio)

संज्ञा (NOUN)

<https://youtu.be/0By000vd6pAA>

BY

Mrs. Sreedevi . D

GOOD MORNING
STUDENTS



संज्ञा (NOUN)

नाम बताने वाले शब्द















व्यक्ति --- PERSON

वस्तु --- THINGS

प्राणी --- CREATURES

स्थान --- PLACE

भाव (EXPRESSION OR FEELINGS)



संज्ञा किसे कहते हैं ?

या

संज्ञा की परिभाषा क्या है ?

किसी भी व्यक्ति , प्राणी , वस्तु , स्थान या

भाव के नाम को संज्ञा कहते हैं ।



व्यक्तियों के नाम – अमन, राज , राधा आदि

वस्तुओं के नाम - मेज़ , कुर्सी आदि

स्थान के नाम - ताजमहल, कुतुबमीनार आदि

प्राणियों के नाम - घोड़ा , चूहा , कोयल आदि

भावमिठास , बुढ़ापा , हरियाली आदि



व्याकरण
कार्यपत्र (कक्षा तीन)
संज्ञा

1. संज्ञा किसे कहते हैं ?

2. अपने तीन दोस्तों के नाम लिखिए :-

3. अपने व दो पड़ोसी देशों के नाम लिखिए :-

4. वाक्यों में से संज्ञा शब्द चुनकर लिखिए :-

क. तितली फूल पर बैठी है। _____

ख. पेड़ से पत्ते झड़ रहे हैं। _____

ग. आज दुकान बंद है। _____

घ. आकाश में बादल छाए हैं। _____



5. दिए गए शब्दों में जो संज्ञा हैं , उन पर गोला लगाइए :-

आम पढ़ो चश्मा मैं
पाठशाला पानी वह नीम

6. दिए गए शब्दों में जो संज्ञा नहीं हैं , उन पर गोला लगाइए:-

तुम्हारा उसे करीना अंदर सुन्दर हम
भारत वीर भूख वे साबुन दादाजी



TAKE CARE

STAY SAFE



THANK YOU